


Nombre:

Fecha:

Calcula el área de las figuras:

1



c = 14 cm

A = cm²

2

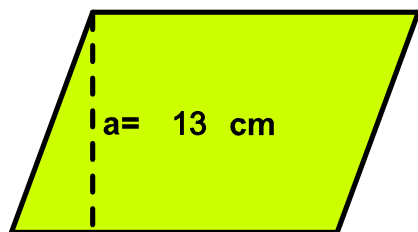


a = 2 cm

b = 6 cm

A = cm²

3

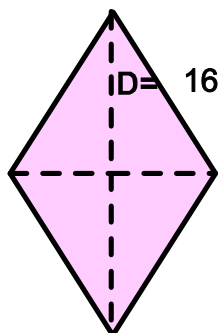


a = 13 cm

b = 14 cm

A = cm²

4

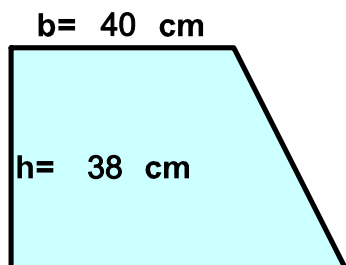


D = 16 cm

d = 15 cm

A = cm²

5



b = 40 cm

h = 38 cm

B = 42 cm

A = cm²


1- 196 cm² 2- 12 cm² 3- 182 cm² 4- 120 cm² 5- 1558 cm²

Nombre:

Fecha:

Calcula el área de las figuras:


1



c = 14 cm

A = cm²

2

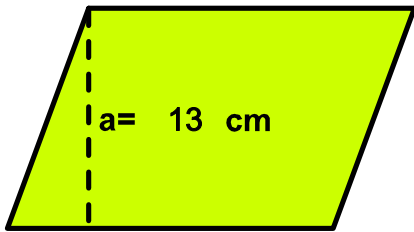


a = 2 cm

b = 6 cm

A = cm²

3

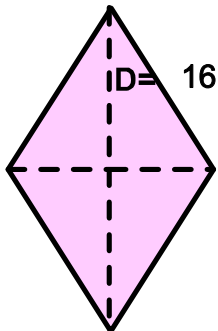


a = 13 cm

b = 14 cm

A = cm²

4

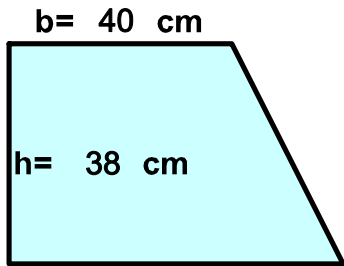


D = 16 cm

d = 15 cm

A = cm²

5



b = 40 cm

h = 38 cm

B = 42 cm

A = cm²